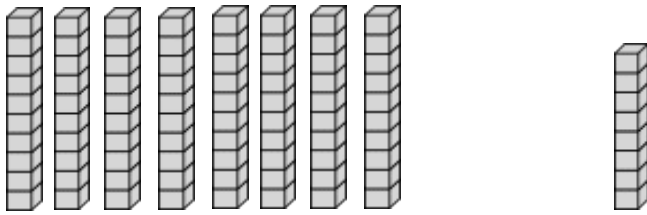


Name: \_\_\_\_\_ Date: \_\_\_\_\_

Place Value  
Tens (10's) and Ones (1's)

1)



\_\_\_\_\_ Tens (10's) + \_\_\_\_\_ Ones (1's) = \_\_\_\_\_

2)



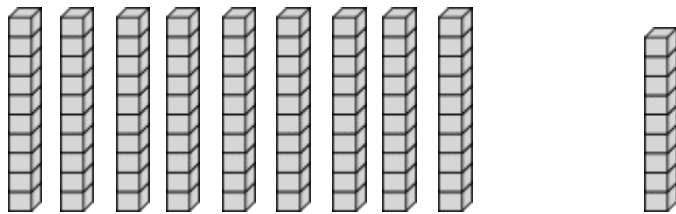
\_\_\_\_\_ Tens (10's) + \_\_\_\_\_ Ones (1's) = \_\_\_\_\_

3)



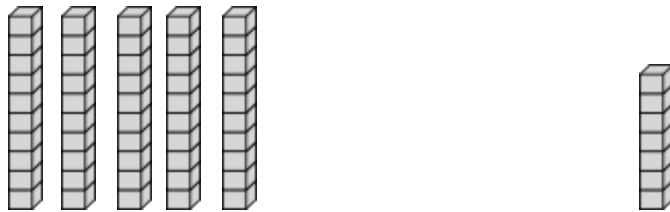
\_\_\_\_\_ Tens (10's) + \_\_\_\_\_ Ones (1's) = \_\_\_\_\_

4)



\_\_\_\_\_ Tens (10's) + \_\_\_\_\_ Ones (1's) = \_\_\_\_\_

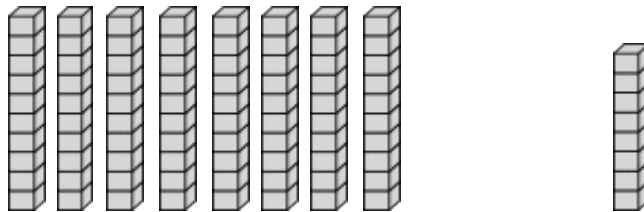
5)



\_\_\_\_\_ Tens (10's) + \_\_\_\_\_ Ones (1's) = \_\_\_\_\_

## Answer Key

1)



$$\underline{8} \text{ Tens (10's)} + \underline{8} \text{ Ones (1's)} = \underline{88}$$

2)



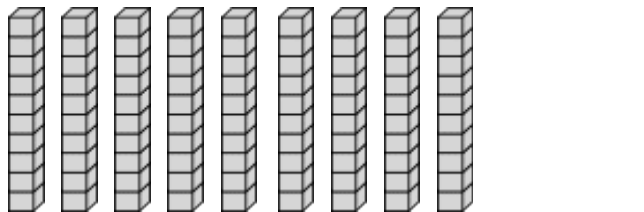
$$\underline{3} \text{ Tens (10's)} + \underline{2} \text{ Ones (1's)} = \underline{32}$$

3)



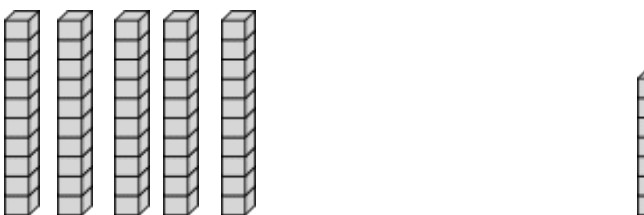
$$\underline{3} \text{ Tens (10's)} + \underline{7} \text{ Ones (1's)} = \underline{37}$$

4)



$$\underline{9} \text{ Tens (10's)} + \underline{9} \text{ Ones (1's)} = \underline{99}$$

5)



$$\underline{5} \text{ Tens (10's)} + \underline{7} \text{ Ones (1's)} = \underline{57}$$