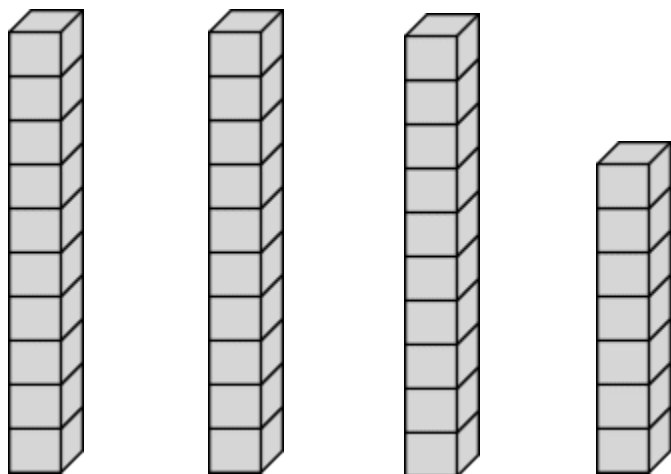
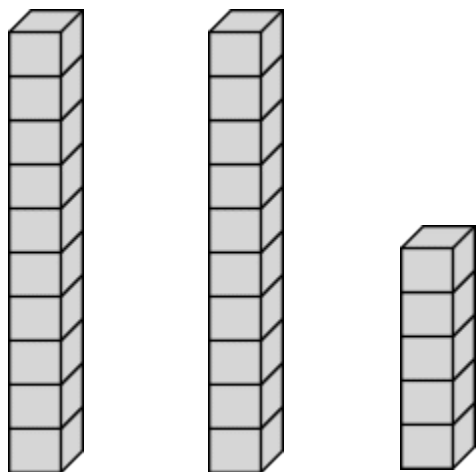


Name: \_\_\_\_\_

### Tens and Ones

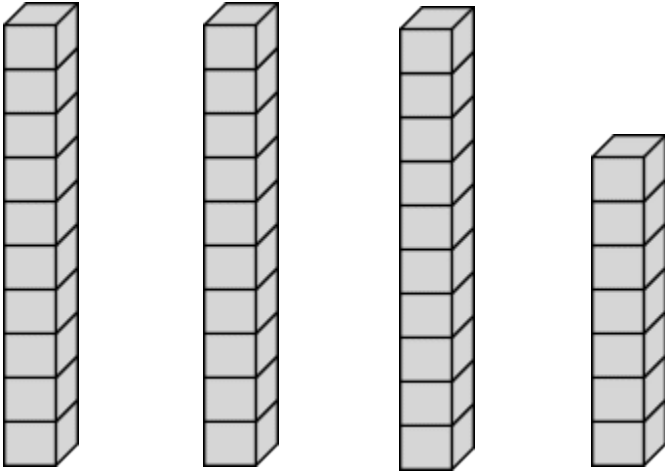


$$\underline{\quad} \text{ Tens } + \underline{\quad} \text{ Ones } = \underline{\quad}$$

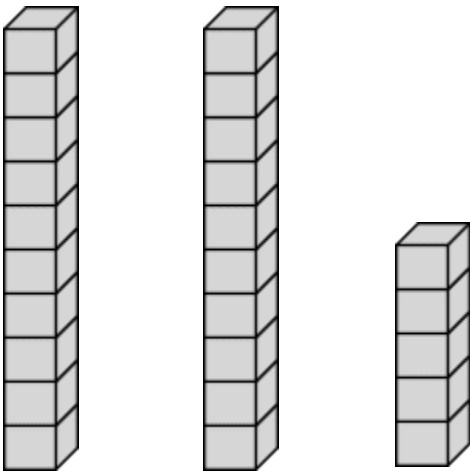


$$\underline{\quad} \text{ Tens } + \underline{\quad} \text{ Ones } = \underline{\quad}$$

## Answer Key



$$\underline{3} \text{ Tens} + \underline{7} \text{ Ones} = \underline{37}$$



$$\underline{2} \text{ Tens} + \underline{5} \text{ Ones} = \underline{25}$$