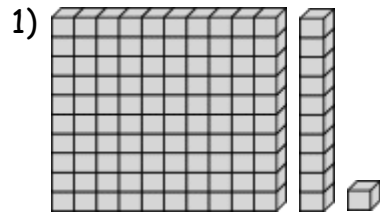
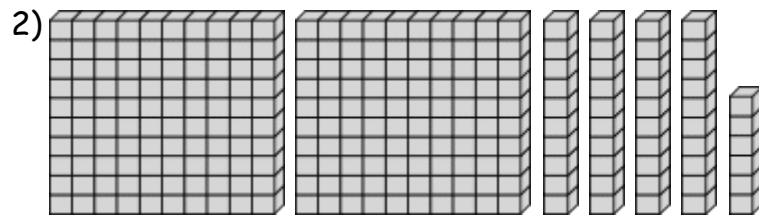


Name: _____ Date: _____

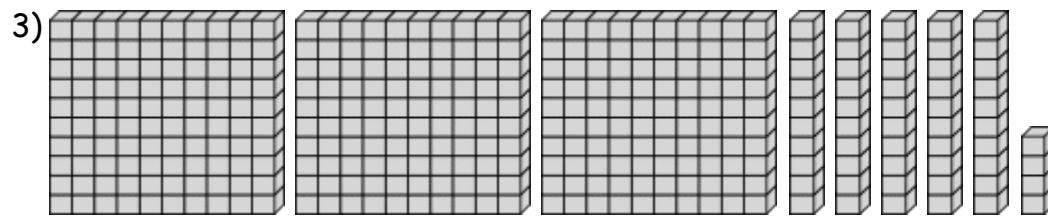
Hundreds (100's), Tens (10's), and Ones (1's)




_____ Hundreds + _____ Tens (10's) + _____ Ones (1's) = _____



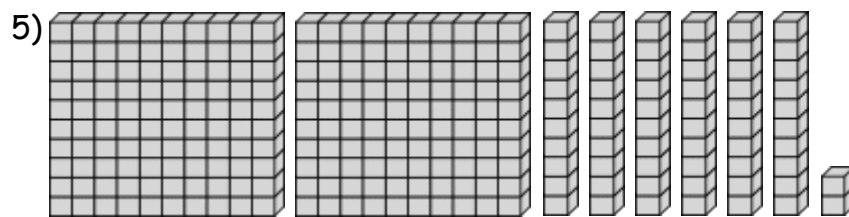
_____ Hundreds + _____ Tens (10's) + _____ Ones (1's) = _____



_____ Hundreds + _____ Tens (10's) + _____ Ones (1's) = _____

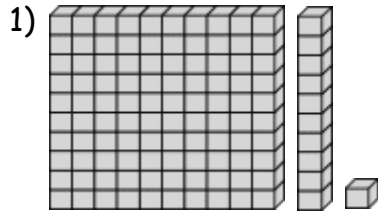


_____ Hundreds + _____ Tens (10's) + _____ Ones (1's) = _____

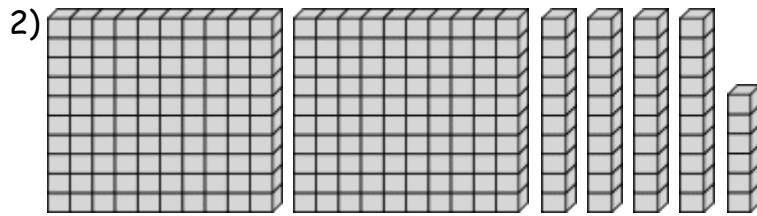


_____ Hundreds + _____ Tens (10's) + _____ Ones (1's) = _____

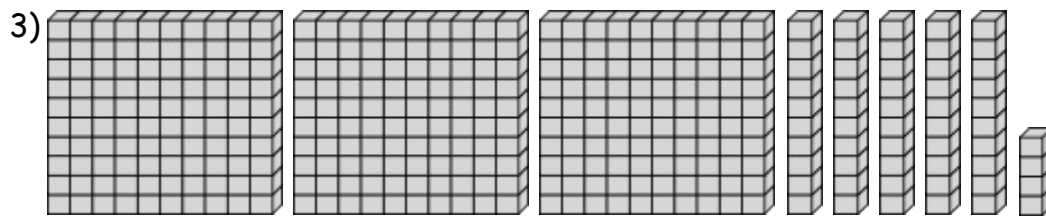
Answer Key




$$\underline{\quad 1 \quad} \text{ Hundreds} + \underline{\quad 1 \quad} \text{ Tens (10's)} + \underline{\quad 1 \quad} \text{ Ones (1's)} = \underline{\quad 111 \quad}$$



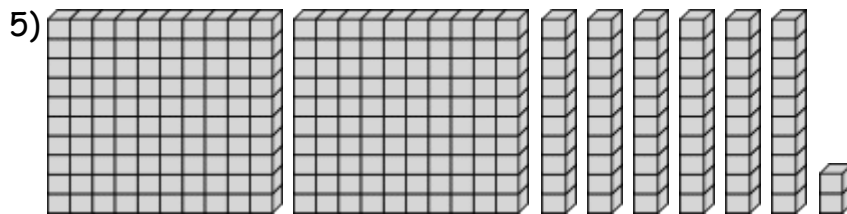
$$\underline{\quad 2 \quad} \text{ Hundreds} + \underline{\quad 4 \quad} \text{ Tens (10's)} + \underline{\quad 6 \quad} \text{ Ones (1's)} = \underline{\quad 246 \quad}$$



$$\underline{\quad 3 \quad} \text{ Hundreds} + \underline{\quad 5 \quad} \text{ Tens (10's)} + \underline{\quad 4 \quad} \text{ Ones (1's)} = \underline{\quad 354 \quad}$$



$$\underline{\quad 3 \quad} \text{ Hundreds} + \underline{\quad 0 \quad} \text{ Tens (10's)} + \underline{\quad 5 \quad} \text{ Ones (1's)} = \underline{\quad 305 \quad}$$



$$\underline{\quad 2 \quad} \text{ Hundreds} + \underline{\quad 6 \quad} \text{ Tens (10's)} + \underline{\quad 2 \quad} \text{ Ones (1's)} = \underline{\quad 262 \quad}$$