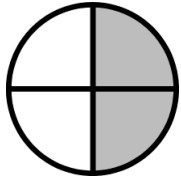
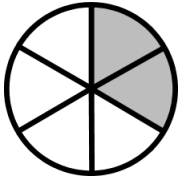
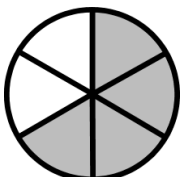
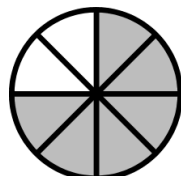
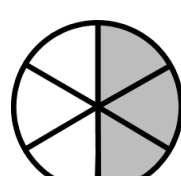


Name: \_\_\_\_\_ Date: \_\_\_\_\_

### Identify and Reduce Fractions

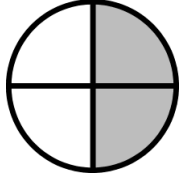
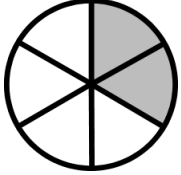
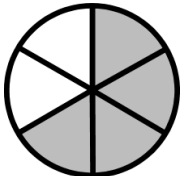
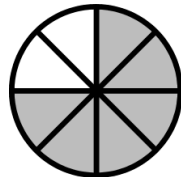
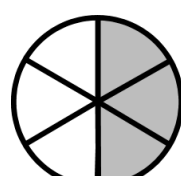
Complete the fractions for the shaded part of each figure.

		As shown	Lowest Terms
1.		$\frac{\quad}{4}$	$\frac{\quad}{2}$
2.		$\frac{\quad}{6}$	$\frac{\quad}{3}$
3.		$\frac{\quad}{6}$	$\frac{2}{\quad}$
4.		$\frac{\quad}{8}$	$\frac{\quad}{4}$
5.		$\frac{\quad}{6}$	$\frac{1}{\quad}$

# Answer Key

## Identify Fractions

Complete the fractions for the shaded part of each figure.

		As shown	Lowest Terms
1.		$\frac{2}{4}$	$\frac{1}{2}$
2.		$\frac{2}{6}$	$\frac{1}{3}$
3.		$\frac{4}{6}$	$\frac{2}{3}$
4.		$\frac{6}{8}$	$\frac{3}{4}$
5.		$\frac{3}{6}$	$\frac{1}{2}$