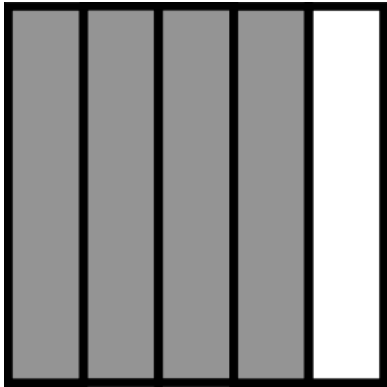


Name: \_\_\_\_\_ Date: \_\_\_\_\_

### Identify Fractions


Complete the fraction for the shaded part of each figure.

1.




\_\_\_\_\_

2.



\_\_\_\_\_

3.



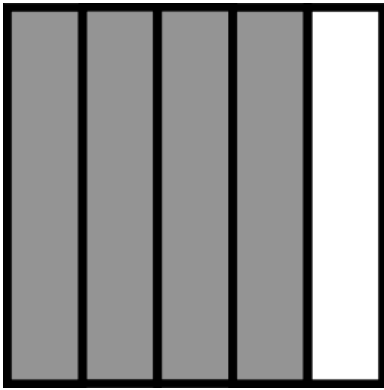
\_\_\_\_\_

# Answer Key

## Identify Fractions


Complete the fraction for the shaded part of each figure.

1.




$$\frac{4}{5}$$

2.



$$\frac{3}{4}$$

3.



$$\frac{2}{2}$$